

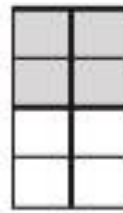
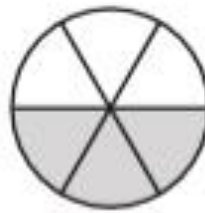
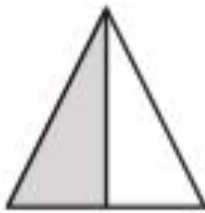
## Maths week 6 activity 2

Remember, to work out half an amount, share the total between two.


# One Half

One half can be written  $\frac{1}{2}$  or  $\frac{2}{4}$  or  $\frac{3}{6}$  or  $\frac{4}{8}$


One half of each of these figures is shaded:



Colour one half of each of these shapes:



Colour one half of each of these groups of animals:



What number is half of 2? \_\_\_\_\_

What number is half of 4? \_\_\_\_\_

What number is half of 6? \_\_\_\_\_

What number is half of 8? \_\_\_\_\_

What number is half of 10? \_\_\_\_\_

What number is half of 20? \_\_\_\_\_