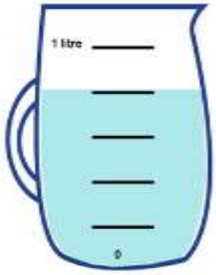


Capacity experiment



Can you investigate some different sized containers by exploring how many cups of water each one holds? Can you compare them? Can you make any predictions? How much is 1 litre? Can you measure this amount out using a measuring jug?



You can investigate capacity by using empty containers such as;



Use anything! Make it as fun as you can!

While you are having fun with this experiment, use words such as; full, empty, half full etc. to describe the amounts.

Complete the table on the next page as you go if you can...

Container 	 Guess	Were you right? ✓ ✗	How many cups filled it up?
1			
2			
3			
4			

Which container held the *most*? _____

Which container held the *least*? _____