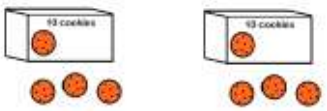




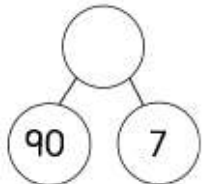
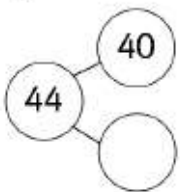
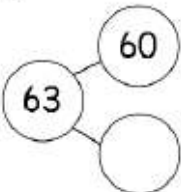
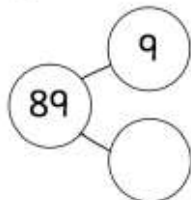
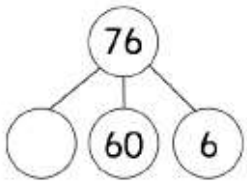
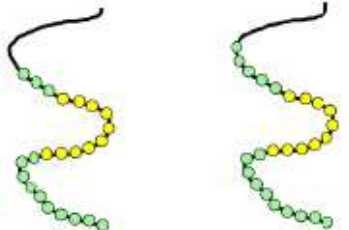
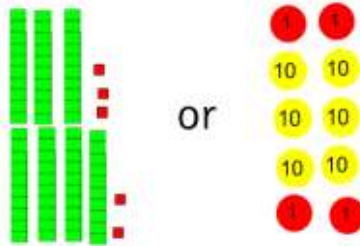



Class _____	Name _____		Week 3		Place Value
Monday	Tuesday	Wednesday	Thursday	Friday	
<p>Each box contains 10 cookies. How many cookies are there altogether?</p> 	<p>What is the total?</p> 	<p>What is the total?</p> 	<p>How many cherries are there?</p> 	<p>Each box contains 10 apples. How many apples are there altogether?</p> 	
<p>Write the numeral for the word.</p> <p>fifty nine</p>	<p>Write the numeral for the word.</p> <p>eighty six</p>	<p>Write the numeral for the word.</p> <p>twenty nine</p>	<p>Write the numeral for the word.</p> <p>forty eight</p>	<p>Write the numeral for the word.</p> <p>seventy three</p>	
<p>What is the missing number in the part whole model?</p> 	<p>What is the missing number in the part whole model?</p> 	<p>What is the missing number in the part whole model?</p> 	<p>What is the missing number in the part whole model?</p> 	<p>What is the missing number in the part whole model?</p> 	
<p>Circle the smallest number. String A      String B</p> 	<p>Circle the smallest amount.</p> 	<p>Tick the lowest amount.</p> 	<p>Underline the smallest of these 3 totals.</p> <p>70 + 7      20 + 8</p> <p>7 tens + 9 ones</p>	<p>Circle the lowest number in each box.</p> <div style="border: 1px solid black; padding: 5px; display: inline-block; margin-right: 20px;">93    99    9</div> <div style="border: 1px solid black; padding: 5px; display: inline-block;">28    29    82</div>	